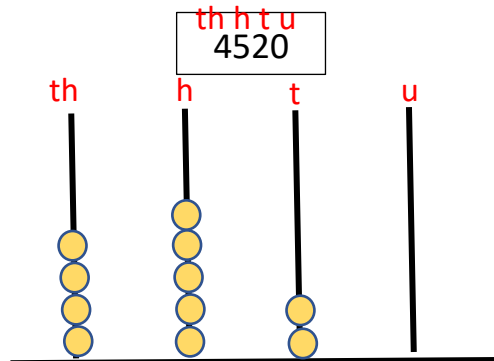
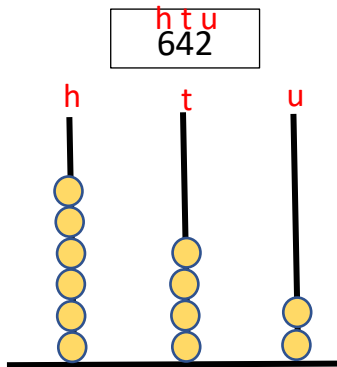


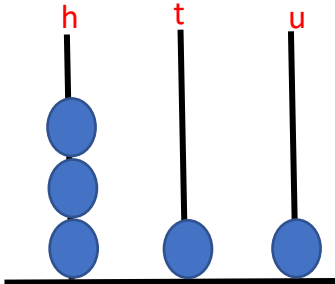
Grade 4 – Mathematics
Topic: Numeration & Notation

Name: _____

1. Represent the following numbers on an abacus.

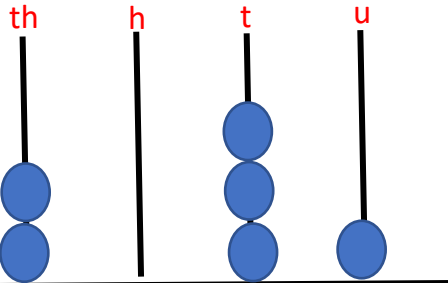


2. Complete.



In figures: 311

In words: Three hundred and eleven



In figures: 2031

In words: Two thousand and thirty-one

3. Fill in the blanks.

a. $\overset{+1}{\curvearrowright}$ 23, 24, 25, 26, 27, 28.

b. $\overset{+1}{\curvearrowright}$ 108, 109, 110, 111, 112, 113.

c. $\overset{+1}{\curvearrowright}$ 562, 563, 564, 565, 566, 567.

d. $\overset{+1}{\curvearrowright}$ 649, 650, 651, 652, 653, 654, 655.

e. $\overset{+1}{\curvearrowright}$ 1021, 1022, 1023, 1024, 1025, 1026.
